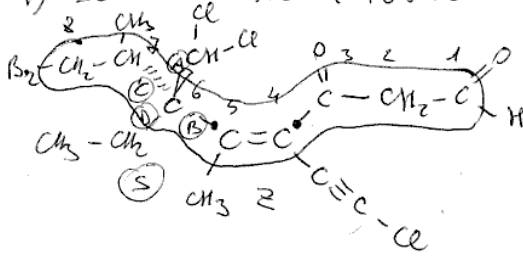


1) Scrivi il nome IUPAC

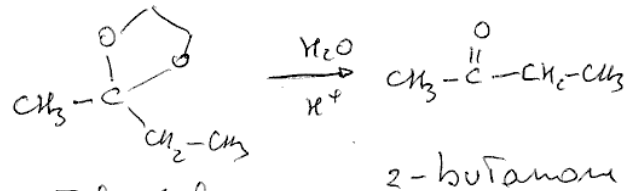
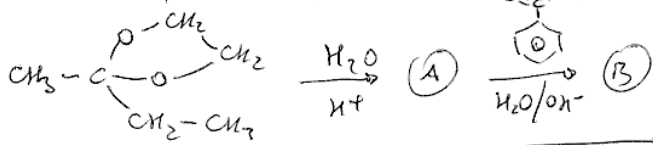


- ottano
- ottanale
- ott-4-en-ale
- 3-oxo
- 4-[2-cloroetil]
- 5-metil
- 6-etil
- 6-(dichlorometil)
- 7-metil
- 8-bromo
- 43,65

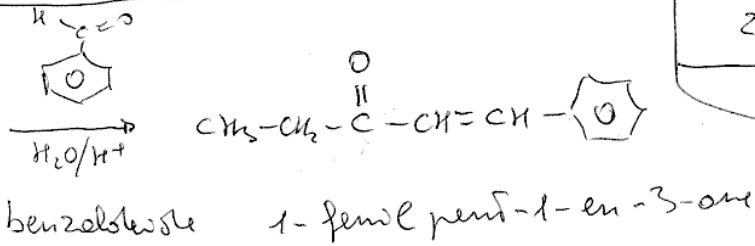
(43,65)-8-bromo-4-[2-cloroetil]-6-(dichlorometil)-6-etil-5,7-dimetil-

3-oxo ott-4-enale

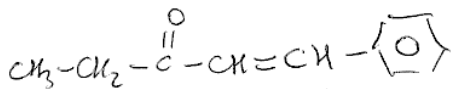
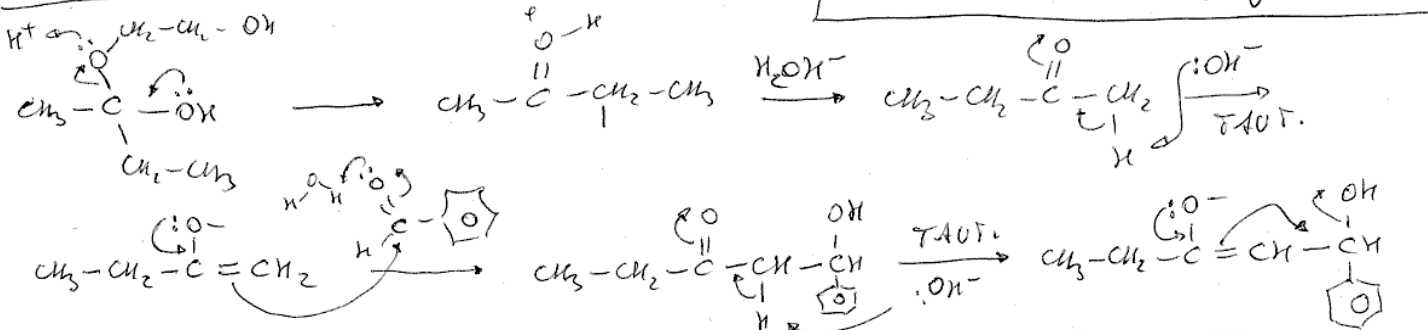
2) Schema, nomi, meccanismi



acetale del 2-butanone



benzaldehyde 1-fenil pent-1-en-3-one



Schema Nomi Meccanismi:

